

SIR APOLLO KAGGWA SCHOOLS
P.4 REVISION WORK SET 3

MATHEMATICS

SECTION A

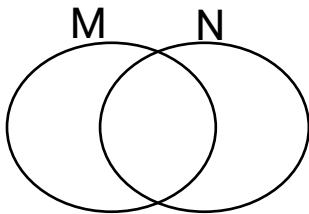
1. Work out: 33

$$\begin{array}{r} \underline{33} \\ \times 3 \\ \hline \end{array}$$

2. What number has been expanded to give;

$$30000 + 400 + 2$$

3. Shade $M \cap N$ on the venn diagram below.



4. Find the next number in the sequence below.

$$4, 7, 10, 13, \underline{\quad}$$

5. Draw a shape of a rectangle in the space below.

6. Find the product of 42 and 16.

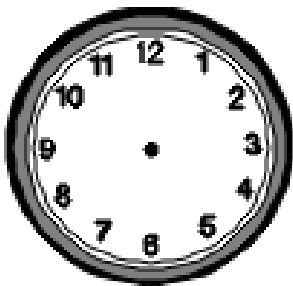
7. Write XXIX in Hindu Arabic numerals.

8. Fill in the missing number.

$$\square + 7 = 15$$

9. Subtract: $\frac{5}{8} - \frac{2}{8}$

10. Show 3 o'clock on the clock face below.



SECTION B

11. Study the price list below and use it to answer the questions that

follow.

Item	Price
Sugar	Sh. 3500
Rice	Sh. 3000
Bread	Sh. 4000

a) What is the cost of 1kg of sugar?

b) Find the cost of 2 loaves of bread.

c) Find the total cost of all the items on the price list above.

12. a) Show 4502 on the abacus.

b) Write in words: 4502

c) Find the sum of the values of 4 and 5 in the number 4502.

13. Use > or < or =

a) 3×4 _____ $4 + 3$

b) 200cm _____ 2m

c) $\frac{1}{4}$ _____ $\frac{1}{2}$

d) $2 \times 0 \times 3$ _____ $2 + 3$

e) 14 days _____ 2 weeks.

ENGLISH

Complete the following sentences using the correct form of the word given in brackets.

1. The old man speaks _____. (soft)
2. Pretty sometimes _____ cricket. (play)
3. Sarah is _____ is than Paul. (short)
4. He has _____ a nice suit today. (wear)
5. Matovu _____ not complete his home work in time. (do)

Re-write as instructed in the brackets.

6. That is a goose. (Re-write the sentence using:.....are.....)

7. None of the pupils is smart. (Begin: All.....)

8. Gabby cooked the food. (Begin: The food.....)

9. **Read the poem below carefully and then answer the questions that follow.**

A Loving Person

What a loving friend!

With long back hair,

Stay home, stay safe,

Covid-19 kills all ages.

What a loving friend!

In a striped T-shirt,

Keep safe by washing hands with soap,

Covid- 19 kills, all ages.

What a loving friend

Be careful,

Avoid hugging and shaking hands,
And observe social distance,
Wear masks to control the spread of this disease.

By Kaudha Brenda P.4 SOUTH

Questions

a) What is the poem about?

b) How many stanzas are in the poem?

c) Who is the poetess?

d) Write one describing word that starts with letter 's' in the poem.

e) How can one avoid Covid- 19?

f) In which class in the poetess?

g) Where should people stay to be safe?

h) Write the title of the poem.

10. Fill in the gaps using the correct form of adjective.

Comparative		Superlative
a)	faster	_____
b)	shorter	_____
c)	_____	thinnest
d)	prouder	_____
e)	smaller	_____
f)	_____	most beautiful
g)	_____	rudest
h)	lighter	_____
i)	kinder	_____
j)	_____	most expensive

SCIENCE

SECTION A

1. Name one artificial source of energy.

2. Identify the type of venation found in leaves of maize plants.

3. How is a housefly able to spread germs?

4. Identify one place where a first aid box is commonly found.

5. Write the short form of;

Presidential Initiative on AIDS Strategy for Communication to youth.

6. Identify the process by which plant roots absorb water and mineral

salts from the soil.

7. State the major reason why garden tools like hoes should be cleaned after use.

8. How is pistil different from stamen?

9. Which part on the human body has the same function as the antenna in insects?

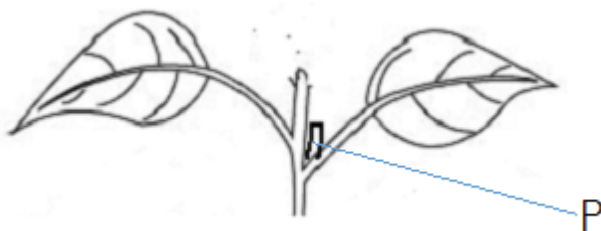
10. Name one example of perennial crops.

11. Mention any one way how people benefit from the process of photosynthesis.

12. Identify the season when farmers prepare land for crop growing.

SECTION B

13. The diagram below shows part of a plant. Study it and use it to answer the questions that follow.



a) Name the part marked P.

b) Identify two parts of a plant that can develop from part marked P.

c) Give one way how leaves are important to a plant.

14. a) Why is it good for a person preparing ORS to first wash hands with clean water and soap?

b) Identify the following when making ORS locally.

i) Solutes _____

ii) Solvent _____

SOCIAL STUDIES

SECTION A

1. Name the tribe which occupies the biggest part of central Uganda.

2. At what time of the day is the shadow shortest?

3. State one farm activity that farmers do in the dry season.

4. Why do we need a market in our community?

5. Write Local Council in short form.

6. Mention any one material used to build a permanent house.

7. How is the road sign below important to pedestrians?



8. What title is given to the person who heads a Municipality?

9. Name one domestic animal kept at home for transport.

10. How many days did God/Allah take to create the universe?

11. Give one quality of a God fearing child.

12. Who is a leader?

13. Study the diagram below and answer questions correctly.



a) What is the source of the raw material used to make the above item?

b) Mention any two uses of the item above.

SECTION

14. Match the service providers in list A to their places of work in list B.

List A

List B

i. vendor

police station

ii. teller

market

iii. pump attendant

bank

iv. police officer

fuel station

i) vendor _____

ii) teller _____

iii) pump attendant _____

iv) police officer _____

15. Give two ways people communicate to God/Allah

i) _____

ii) _____