

# SIR APOLLO KAGGWA SCHOOLS SINCE 1996

CLASS : P.5

SUBJECT : SCIENCE ASSESSMENT WEEK 3 2020

NAME : \_\_\_\_\_ STREAM: \_\_\_\_\_

DATE : \_\_\_\_\_

## SECTION A

1. Name the type of chicken kept by poultry farmers mainly for egg production.

\_\_\_\_\_

2. Why is clay soil suitable for modeling?

\_\_\_\_\_

3. Give any one way crop farmers benefit from sun birds.

\_\_\_\_\_

4. How is a smoker important to a honey harvester?

\_\_\_\_\_

5. Identify any one disease which attacks both rabbits and poultry.

\_\_\_\_\_

6. How are female anopheles mosquitoes dangerous to human beings?

\_\_\_\_\_

7. State any one example of a stem tuber.

\_\_\_\_\_

8. Why do some objects float when placed in water?

\_\_\_\_\_

9. Where does digestion of food begin from in man?

\_\_\_\_\_

10. In which way does debeaking help to control egg eating in poultry?

\_\_\_\_\_

11. How does mulching help to preserve moisture in the soil?

\_\_\_\_\_

12. State any one role of the tongue during digestion.

\_\_\_\_\_

## **SECTION B**


13. (a)What is immunity?

\_\_\_\_\_

(b) Outline the two types of immunity.

(c) Why is tuberculosis immunized against at birth?

14. Study the diagram below and answer the questions that follow



(a) Name the processes marked A and B

A \_\_\_\_\_ B \_\_\_\_\_

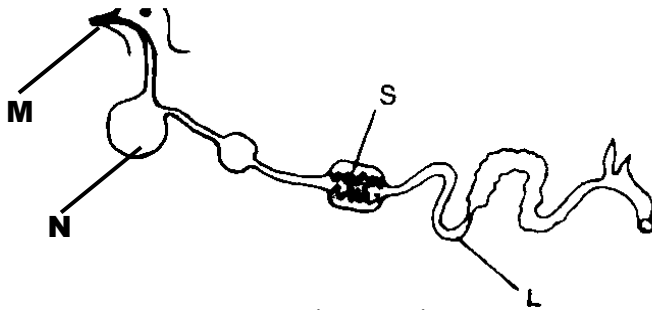
(b) How important is object D in the above process?

\_\_\_\_\_

(c) How are clouds marked C important to crop farmers?

\_\_\_\_\_

15. Use the diagram below to answer the questions that follow.



(a) Name parts marked N and L

N \_\_\_\_\_ L \_\_\_\_\_

(b) How are small stones found in part S useful during digestion?

\_\_\_\_\_

(c) Give any one importance of part M to the bird.

\_\_\_\_\_

16. Rhonah is a poultry farmer. She constructed a poultry house and covered its floor with litter.

(a) Name the system of keeping poultry Rhonah is using to rear her poultry.


\_\_\_\_\_

(b) Mention any one material Rhonah uses as litter in her poultry house.

(c) How does litter keep Rhonah's poultry house dry?

(d) State the reason why Rhonah is advised to regularly turn the litter in her poultry house.

17. Study the diagram below and use it to answer the questions that follow.



(a) State the importance of the above instrument to health workers.

(b) Of what importance is part P on the instrument above?

(c) Why does a health worker shake the above instrument before using it on another patient?

(d) Give one reason why mercury is commonly used in the above instrument.

# SIR APOLLO KAGGWA SCHOOLS SINCE 1996

CLASS : P.5

SUBJECT : MATHEMATICS ASSESSMENT WEEK 3 2020

NAME : \_\_\_\_\_ STREAM: \_\_\_\_\_

DATE : \_\_\_\_\_


## SECTION A

1. Work out: 584

$$\begin{array}{r} 584 \\ - 123 \\ \hline \end{array}$$

2. Write XLVII in Hindu Arabic numerals.

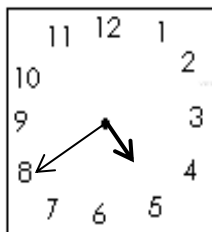
3. In the venn diagram below, shade the region S - T



4. Round off 45467 to the nearest ten thousand.

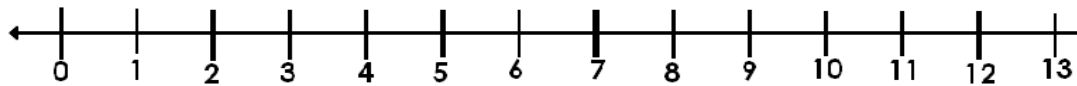
5. Change 9kg to grammes.

6. The clock face below shows time in the afternoon. Tell the time.

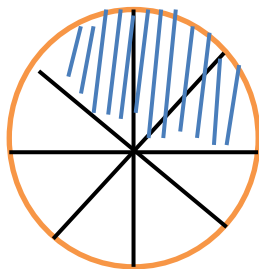


7. Find the next number in the sequence: 1, 4, 9, 16, \_\_\_\_\_

8. Work out  $3 \times 5$  on the number line below



9. What fraction is unshaded in the diagram below?



10. Draw an angle of  $60^\circ$  using a protractor.

### SECTION B (15 marks)

11. The table below shows the number of goals scored by some teams in a football competition.

<b>Goals</b>	25	30	20	15	12	18
<b>Teams</b>	KCCA	Vipers	Sc Villa	Jinja SS	Masaka	Kamuli

(a) How many teams scored less than 20 goals? (1 mark)

(b) Which team scored most goals? (1 mark)

(c) How many more goals did KCCA score than Masaka FC? (1 mark)

(d) Calculate the average number of goals scored by all the teams. (2 marks)

12. Allen bought the following items from a shop.

- 3 bars of soap at sh. 1200 per bar.
- $1\frac{1}{2}$  kg of sugar at sh. 4500
- A half a kg of salt at sh. 1000 per kg

(a) What was her total expenditure?

(a) If she had sh. 10,000, how much money did she remain with? (2 marks)

# SIR APOLLO KAGGWA SCHOOLS SINCE 1996

CLASS : P.5

SUBJECT : ENGLISH ASSESSMENT WEEK 3 2020

NAME : \_\_\_\_\_ STREAM: \_\_\_\_\_

DATE : \_\_\_\_\_

Fill in the blank space with the most suitable word.

1. \_\_\_\_\_ I was sick, I went to school.
2. The computer was \_\_\_\_\_ expensive for John to buy.
3. They are driving their cars, \_\_\_\_\_ they?
4. The letter "d" appears \_\_\_\_\_ in the word "address"
5. When Isabirye's car \_\_\_\_\_ down, he took it to the garage for repair.

Complete the sentence using the correct form of the word in the brackets

6. They said that the envelopes were \_\_\_\_\_ (they)
7. Aisha \_\_\_\_\_ dropped the phone. (accident)
8. Joseph was \_\_\_\_\_ letters while his sister was reading a novel. (write)

Write in full

9. P O box \_\_\_\_\_
10. RSVP \_\_\_\_\_

Rewrite as instructed in the brackets.

11. The chauffeur will not drive the car if it does not have fuel. (Rewrite using: .....unless.....)  
\_\_\_\_\_  
\_\_\_\_\_
12. The postman is likely to collect the letters today. (Rewrite using: ....might .....)  
\_\_\_\_\_
13. She read her books. She surfed the internet first. (Join using: .....after surfing .....)

---

14. Chandiru deposited money in her phone. She wanted to buy airtime. (Join using: so as .....)

---

15. We should wash our hands to avoid COVID 19. (Rewrite using: .....ought .....)

---

### SECTION B

16. Read the letter below carefully and use it to answer the questions that follow.

Sak Primary School,  
P O Box 7153,  
Kampala, Uganda

30<sup>th</sup> April, 2020

Dear Anna

I am so excited to write this letter to you. How are you, your two sisters and brother doing? My family and I are fine.

I have written this letter to tell you how I spend my time during this break. I read my books every day before lunch time. Then I watch TV for two hours and I go to play for one hour. I help to wash utensils in the evening. I also receive work from my school through the internet, and I do it every Friday. I hope to keep focused until we return to school.

Please, reply and tell me how you are spending your time during this break. Remember to sanitize regularly and keep a social distance to avoid the spread of COVID 19.

Your affectionate friend,  
Esther.

### Questions

(a) Who is the writer of this letter?

---

(b) To whom was this letter written?



---

(c) When was this letter written?

---

(d) To which school does the writer of this letter go?

---

(e) Where is the writer's school found?

---

(f) How many siblings does Anna have?

---

(g) For how long does the writer of this letter watch TV?

---

(h) What does she do after watching TV?

---

(i) How does the writer receive work from her school?

---

(j) What does the writer advise the receiver of the letter to do at the end?

---

## SIR APOLLO KAGGWA SCHOOLS SINCE 1996

CLASS : P.5

SUBJECT : SOCIAL STUDIES ASSESSMENT WEEK 3 2020

NAME : \_\_\_\_\_ STREAM: \_\_\_\_\_

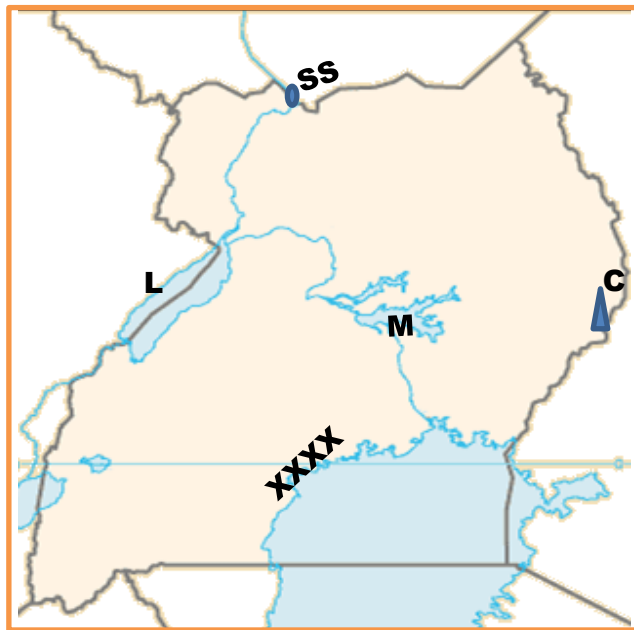
DATE : \_\_\_\_\_

**SECTION A**

1. Which country does Uganda border in the East?  
\_\_\_\_\_
2. Why is Kasese town cooler than Kampala?  
\_\_\_\_\_
3. Which weather element is measured by wet and dry thermometer?  
\_\_\_\_\_
4. How do forests help in rain formation?  
\_\_\_\_\_
5. Give one way how a government can improve on the tourism industry.  
\_\_\_\_\_
6. Mention any one method early man used to kill animals for food.  
\_\_\_\_\_
7. Give one Bantu tribe in Western Uganda that practice male circumcision.  
\_\_\_\_\_
8. Write UPE in full  
\_\_\_\_\_
9. **Either:** Which celebration marks the end of lent?  
\_\_\_\_\_  
**Or:** Which celebration marks the end of Ramadhan?  
\_\_\_\_\_
10. **Either:** Why did God choose Moses to rescue the Israelites?  
\_\_\_\_\_  
**Or:** Why did Allah choose Musa to rescue the Ban-Israel from Egypt?  
\_\_\_\_\_

**SECTION B**

11. Study the sketch map of Uganda below and answer the questions that follow.



(a) How was the formation of Lake L different from that of Lake M?

(b) Give one problem faced by people living on the slopes of Mt. C

(c) Name the town marked SS

(d) Why is the region marked XXXX densely populated?

12. (a) What is meant by rural - urban migration?

(b) Give two causes of rural - urban migration.

(c) State any one danger of rural - urban migration.

13. Match the crops in list A to their products in list B

**Crops**

Pyrethrum

Cloves

Tobacco

Tea

**Products**

spices / medicine

insecticides

beverages

cigarette / cigar