

SIR APOLLO KAGGWA SCHOOLS
P.4 REVISION WORK SET 4

MATHEMATICS

SECTION A

1. Work out: 42

$$\begin{array}{r} \times 3 \\ \hline \end{array}$$

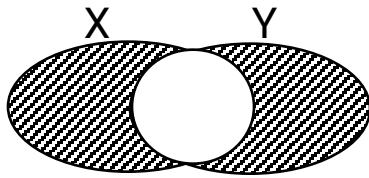
2. Given that Set K = {vowel letters}, How many elements are in Set K?

3. What number has been expanded?

$$4 + 8000 + 70$$

4. Subtract: $\frac{7}{11} - \frac{2}{11}$

5. Describe the shaded region.



6. Find the missing number in the sequence below.

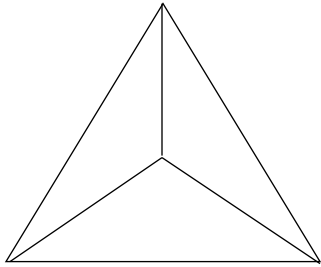
12, 14, 16, 18, 20, _____

7. What is the value of 5 in the numeral 4 5 6?

8. How many weeks are in 21 days?

9. Simplify: $5k + 2p + k + 7p$

10. How many triangles can you see?



SECTION B

11. Complete the table below.

(5 marks)

Pairs	1	2	—	4	—	6
Shoes	2	—	6	—	10	—

12. Use $>$, $<$ or $=$ to complete the statements below. (5 marks)

a) 342 _____ 234

b) XVI _____ 16





c) $4 + 4$ _____ 4×4


d) 1kg of stones _____ 1kg of feathers.



e) _____

13. The picto-graph below shows the number of eggs collected by four pupils.

Annet	
Joan	
Joseph	
Amoti	

 represents 5 eggs.

a) How many eggs did Joseph collect? (2 marks)

b) Who collected the smallest number of eggs?

c) How many eggs did the pupils collect altogether? (2 marks)

SCIENCE

1. Give one example of a social insect.

2. How are shadows useful to people?

3. Which part of a maize grain absorbs and supplies food to the embryo?

4. Which element of weather is measured by barometer?

5. State one way of controlling soil erosion on hilly areas.

The diagram below is of a leaf. Use it to answer question No. 6 and 7.



6. Name the above type of leaf. _____

7. How is part N important to a leaf?

8. State one reason why farmers mulch their gardens.

9. What name is given to the air in motion?

10. Which part of a flower receives pollen grains during pollination?

SECTION B

11. a) State two reasons for giving first aid to casualties.

i) _____

ii) _____

b) How are the following items useful during first aid administration?

i) safety pin _____

ii) cotton wool _____

12. a) State two characteristics of insects.

i) _____

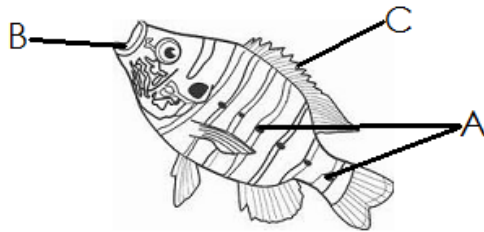
ii) _____

b) How are the following parts important to insects?

i) Spiracles _____

ii) Antenna _____

13. The diagram below is of a fish. Use it to answer questions.



a) Name the parts marked A and B.

A _____ B _____

b) How is part C useful to a fish?

c) What does a fish use to breath?

14. a) Apart from warmth, give two conditions necessary for germination.

i) _____

ii) _____

b) Give two types of germination.

i) _____

ii) _____

15. a) Give two examples of non-flowering plants which reproduce by means of spores.

i) _____

ii) _____

b) State two examples of monocotyledonous plants.

i) _____

ii) _____


SOCIAL STUDIES

1. What is transport?

2. Letasi was going to church in the morning when she saw her shadow in front. In which direction was the church?

3. Write the name of the Ugandan national army.

4. In the space below, draw the map symbol of a plateau



5. Who is the current prime minister of Uganda'?

6. Write one thing got from a cow.

7. Which feature prevents the school from trespassers?

8. Identify the quickest type of transport

9. In which division is our school found?

10. State the title given to the person who heads a country.

For questions 11 to 13, answer Either a Christian Or an Islamic question but not both on a number. No marks shall be awarded to a child who attempts both alternatives on a number.

11. Either: In which river was Jesus baptized?

Or: Name one prophet in Islam

12. Either: Who wrote the book of Genesis?

Or: How many times does a true Muslim pray a day?

13. Either: How old was Jesus by the time he died?

Or: How old was Prophet Muhammad by the time he died?

SECTIONB (12marks)

14. a) Write the colors of the Uganda flag in their order.

i) - _____

ii) _____

iii) _____

b) Name the bird found in the center of the Uganda flag.

15. a) What is a family?

b. Mention two types of families.

i) _____

ii) _____

c) Give one duty of a child at home.

For question 16, answer Either a Christian Or an Islamic question but not both on a number. No marks shall be awarded to a child who attempts both alternatives on a number.

16 Either: a) How did Noah get saved from the floods?

b) How many people entered Noah's Ark?

c) For how long did it rain during Noah's time?

d) Mention one of Noah's sons.

Or: a) How many prophets do Muslims believe in?

b) Who was the last prophet in Islam?

c) Name the prophet who was born without a father?

d) Name the son of Prophet Adam who was killed by his brother.

ENGLISH

SECTION A

Fill in the blank spaces with a suitable word.

1. We read _____ interesting book last week.
2. Simon does not like roasted maize, _____ he?
3. The lazy girl doesn't know _____ her dress looks.
4. The baby is tired _____ eating porridge.
5. There isn't _____ salt in that shop.

For questions 6 to 10, use the correct form of the word given in brackets.

6. Opio _____ his parents every day. (greet)
7. Johana is the _____ girl in their family.
(beautiful)
8. Young children like _____ bicycles. (ride)
9. Daddy bought two big _____ of bread. (loaf)
10. Good children write their work _____. (neat)

In questions 11 to 13, re-write the sentences giving the plural form of the underlined word.

11. Their wife went to China.

12. The children were beaten by the mosquito.

13. We visited Sudir's factory.

Arrange the words in alphabetical order.

14. covid, sanitizer, mask, curfew

15. burn, boy, bag, bean

Give the opposite of the underlined word.

16. The artist used a sharp pencil to draw the pictures.

17. Our teacher bought an expensive car.

18. The surface of this table is rough.

Write the given short forms in their full forms.

19. mustn't _____

20. Mr. _____

For questions 21 to 30, re-write the sentences as instructed in the brackets.

21. I like mangoes more than oranges. (Re-write using: ...prefer....)

22. A buffalo is very fat. An elephant is very fat. (Join the sentences using:as.....as.....)

23. Ruth is thin. Jane is also thin. (Re-write the sentences beginning: Both.....)

24. The truck driver contracted COVID 19. He did not wear a face mask. (Join the sentences using:because.....)

25. The shopkeeper sells some sugar. (Re-write using: ...doesn't....)

26. Mummy washed utensils. (Begin: Did.....)

27. I would like to borrow your pen. (Rewrite and begin: May I.....)

28. As Musa was swinging, he hurt his knee. (Re-write the sentence beginning: While.....)

29. Joline is the girl. Her dress got torn. (Join using:whose.....)

30. The boy disobeyed the teacher. The boy did not pass the test. (Join the sentences using:who.....)

SECTION B

31. Read the story below and answer the questions about it.

Kabuya is a stubborn boy but very bright in class. He studies in Watoto Primary School in Primary four. This boy always comes late to school. The class teacher Mr. Muwada Hannington warned him but he didn't change his behaviour.

Last week, his class teacher decided to catch him late. Mr. Muwada arrived at school at 6:30am and he sat at the back of the classroom. At about eight o'clock, Kabuya arrived. The askari opened for him the gate and he entered as fast as a deer.

He did not ask for permission, instead he entered the classroom thinking there was no teacher.

He had a hut on his head as usual. He then stood on his desk and

greeted the pupils in a very funny voice.

Mr. Muwada Hannington jumped from his chair and gave him a very strong slap which made him fall on his back. "I am sorry sir, I will never misbehave," said Kabuya trembling with fear.

Questions

1. What is the story about?

2. In which school is Kabuya?

3. What kind of boy is Kabuya?

4. Who is the class teacher of P.4 in Watoto Primary School?

5. Did Kabuya change his behaviour when Mr. Muwada warned him?

6. Why did Mr. Muwada arrive at school very early at 6:30am?

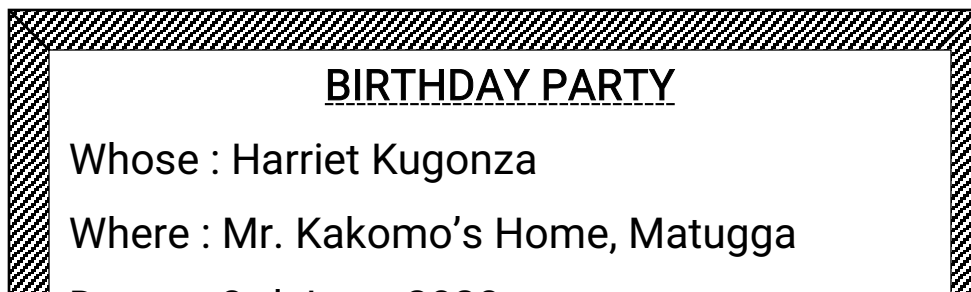
7. At what time did Kabuya arrive at school that day?

8. Who opened the gate for Kabuya?

9. What was Kabuya wearing on his head?

10. Give a suitable title for the story.

32. **Read the following poster and answer in full sentences the questions that follow.**



Questions

a) What is the poster about?

b) Whose birthday party is it?

c) Where will the party be held?

d) When will the party take place?

e) At what time will the party begin?

f) How much is one supposed to pay?

g) What will be there in plenty?

h) At what time will the party end?

i) Will alcohol be allowed?

j) Write a.m in full.
