

**SIR APOLLO KAGGWA SCHOOLS**  
**P.4 REVISION WORK SET 5**  
**SCIENCE**  
**SECTION A**

1. Name one mineral salt lost from the body during dehydration.

---

2. How does fish help to control the spread of malaria?

---

3. State one way how plants reduce the rate of transpiration.

---

4. Mention one plant with a fibrous root system.

---

5. Give one example of annual crops.

---

6. Identify one cultural practice that lead to the spread of AIDS.

---

7. How is wind energy useful to crop farmers in the time harvesting?

---

8. State the difference between burns and scalds.

---

---

9. How are petals of flowers able to attract pollinators?

---

10. Name the source of solar energy in the environment.

---

11. Give one reason why flowers are used in making perfumes.

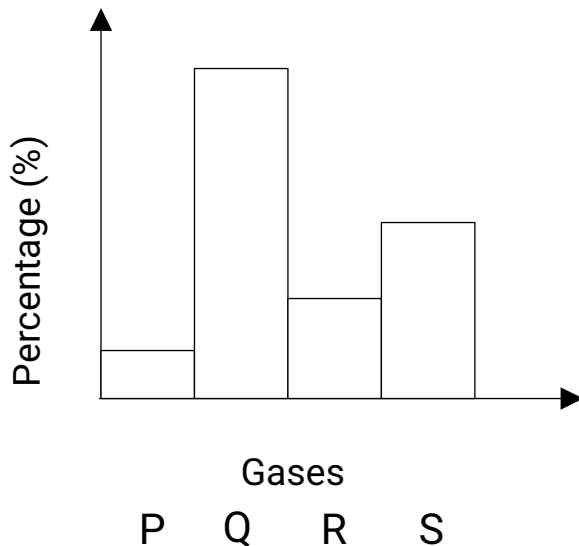
---

12. Name the bacteria found in the root nodules of legumes.

---

**SECTION B**

13. The diagram below shows the composition of air in the atmosphere. Use it to answer the questions that follow.



a) State the percentage of gas marked "S" in the atmosphere.

---

b) Which letter on the graph represents the gas used by plants to make starch?

---

c) Name the gas represented by letter "Q" on the graph.

---

d) State any one property of air.

---

14. a) How do flowering plants reproduce?

---

b) Name the example of a non flowering plant.

---

c) State the role of chlorophyll in the process of photosynthesis.

---

d) Identify the plant that stores food in its leaves.

---

## SOCIAL STUDIES

### SECTION A (13marks)

1. Which tool was used by early man to trap fast running animals?

---

2. Where do pedestrians cross busy roads from?

---

3. Mention one domestic animal kept for labor.

---

4. Name the man-made lake found in Kampala district.

---

5. What title is given to the political head of a district?

---

6. Write UPDF in full.

---

7. Who is the current minister for health in Uganda?

---

8. In the space below, draw the map symbol of a hill.



9. What is a nuclear family?

---

---

10. How many members make up the LC1 committee?

---

**For questions 11-13, answer Either a Christian Or an Islamic question but not both in a number. No marks shall be awarded to a pupil who attempts both alternatives in a number.**

11. Either: In whose image was man created?

---

Or: In whose image was man created?

---

10. Either: Who wrote the first five books of the Bible?

---

Or: Who received the Tauret?

---

11. Either: Name one prophet in Christianity who preached about the coming of Jesus Christ.

---

Or: In which town was Prophet Muhammad buried?

---

**SECTION B (12Marks)**

12. (a)What is a map?

---

---

(b) List down any three elements of a good map.

i) \_\_\_\_\_

ii) \_\_\_\_\_

iii) \_\_\_\_\_

13. (a) What are legends?

\_\_\_\_\_  
\_\_\_\_\_

(b) Suggest any one legend you know.

\_\_\_\_\_

(c) Name two sons of Gulu.

i) \_\_\_\_\_

ii) \_\_\_\_\_

**For question 16, answer Either a Christian Or an Islamic question but not both in a number. No marks shall be awarded to a pupil who attempts both alternatives in a number.**

14. Either: (a) Who is a martyr?

\_\_\_\_\_  
\_\_\_\_\_

(b) Who was the youngest Uganda martyr?

\_\_\_\_\_

(c) Why is 3<sup>rd</sup> June still remembered in the history of Uganda?

\_\_\_\_\_

(d) Name any one martyr you know apart from the one mentioned in (b) above.

\_\_\_\_\_

Or: (a) Who is a Convert?

\_\_\_\_\_

(b) Who was the first person to convert to Islam?

\_\_\_\_\_

(c) How did Sumayyah meet her death?

\_\_\_\_\_

(d) Apart from the convert mentioned in (b) above, name any other convert you know.

---

## ENGLISH

Fill in the blank space with a suitable word.

1. Children like reading poems more \_\_\_\_\_ stories.
2. The sun sets \_\_\_\_\_ the west.
3. They were tired \_\_\_\_\_ playing of volley ball.
4. How \_\_\_\_\_ is a kilogram of sugar in your shop?

Use the correct form of the word given in the brackets.

5. It \_\_\_\_\_ rains in winter. (usual)
6. Of the two animals, the elephant is the \_\_\_\_\_. (fat)
7. February is the \_\_\_\_\_ month of the year. (two)
8. Dad carried an umbrella because the day was \_\_\_\_\_. (sun)
9. The barber \_\_\_\_\_ a nice house last year. (build)

Re-write each sentence giving the opposite of the underlined word.

10. The stubborn boy switched on the TV.
- 

11. Our school is on a low land.
- 

Re-write the sentences as instructed in the brackets.

12. A bus is more expensive than a lorry. (Re-write the sentence beginning: A lorry is not.....)
- 

13. I don't like walking at night. (Re-write the sentence using: .....hate.....)

---

14. That blue bag is mine. (Re-write the sentence using:  
.....belongs.....)

---

15. I will borrow a pen from Moses. (Re-write the sentence beginning:  
Moses will.....)

---

16. Read the conversation below and answer the questions about it.

**Stranger** : Good morning, young man.

Tom : Good morning, Sir.

**Stranger** : Could you please direct me to Nsami Hospital?

Tom : All right. Nsami Hospital is on the left hand side of the  
road after the next junction

**Stranger** : Is it the other tall white building I see?

Tom : Yes, it is, Sir.

**Stranger** : How far is it from here?

Tom : It is only one kilometre from here.

**Stranger** : Thank you young man, have something.

Tom : I am sorry, Sir, my parents refused me to accept gifts  
from strangers.

**Stranger** : Ok, God bless you.

Tom : Thank you, Sir.

### Questions

1. How many people took part in the conversation?

---

2. What time of the day did they meet?

---

3. Who talked first?

---

4. Where was the stranger going?

---

5. Where was Nsami Hospital located?

---

6. Describe Nsami Hospital using one sentence.

---

7. How far is the hospital from where stranger met Tom?

---

8. Why did Tom refuse the gift?

---

9. What kind of boy do you think Tom is?

---

10. Give a suitable title to the conversation.

---

## MATHEMATICS

1. Share 36 apples amongst 4 boys.

2. Draw bundles and tallies to represent 17.

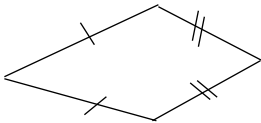
3. Set  $P = \{\text{COVID}\}$ . How many elements are in Set P?



4. Write XXIX in Hindu Arabic numeral.

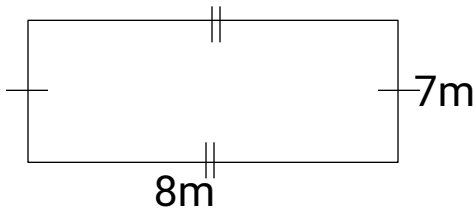
5. A stool has 3 legs. How many legs do 19 stools have?

6. Name the shape below.



7. Write 2049 in words.

8. Find the total distance around the figure below.



9. How many days has the month of July?

10. Use  $>$ ,  $<$  or  $=$  to complete the statement below.

$(5 \times 4)$  \_\_\_\_\_ XXVIII



b) Find their total age.

(2 marks)

c) Find the difference of their age.

(1 mark)

**END**