

SIR APOLLO KAGGWA SCHOOLS

PRIMARY FIVE ENGLISH SET SIX

Fill in the space with a suitable word;

1. Kyazze is _____ Ugandan national.
2. If I went to America, I _____ visit Disney Studios.
3. Jasmin speaks _____ fluently because she was born in France.
4. A _____ of goats was seen grazing in the field.

Use the correct form of the word in the brackets to complete the sentence.

5. One should post one's letter by _____. (self)
6. Diana is the _____ girl in our class. (shy)
7. I have two _____. (diary)
8. I found Tom _____ Mary's mobile phone. (hide)

Rewrite the sentence giving one word for the underlined group of words.

9. I saw a book containing addresses and telephone numbers at the post office.
10. Bizimana is a citizen of Rwanda.

Rewrite the sentences as instructed in the brackets.

11. This is the police station. My friend was held here for breaking the curfew law. (Join using.....where.....)

12. We should wash our hands and wear face masks to avoid the spread of Covid-19. (Set a question for this answer)

13. I am not a Ugandan, am I? (Rewrite the sentence and end.....aren't I?)

14. Garang is not a Congolese. Garang is a Sudanese. (Join using.....but.....)

15. Biraro switched on the computer. He wanted to surf the internet.

(Join using.....so as.....)

16. The sentences below are not correctly arranged. Rewrite them in their correct order to form a composition about the computer.

- a) The mouse also helps to move the cursor and open a file.
- b) The first part is the computer monitor or screen.
- c) The keyboard allows typed input into the computer.
- d) A computer is a device which has four major external parts.
- e) The second part is the system unit.
- f) Lastly, there is the mouse which is a short cut of the keyboard.
- g) This system unit contains the memory, the power supply, disk drives and the motherboard.
- h) This is where information is displayed.
- i) It is the system unit where all the computer processes take place.
- j) The third part is the keyboard.

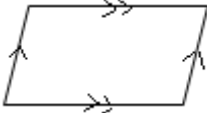
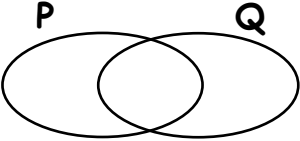
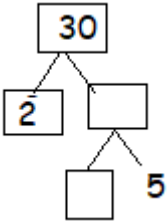
- a. _____
- b. _____
- c. _____
- d. _____
- e. _____
- f. _____
- g. _____
- h. _____
- i. _____
- j. _____

END

SIR APOLLO KAGGWA SCHOOLS

PRIMARY FIVE MATHEMATICS SET SIX

SECTION A (10marks)

1.	Work out: 22×4	6.	Work out: $\frac{5}{12} \div \frac{5}{9}$
2.	Write 40,080 in words	7.	Name the shape below. 
3.	Describe the shaded region. 	8.	Arrange 303, 330, 331, 313, 133 in descending order.
4.	Simplify: $4k - 3k + k$	9.	If Nandi buys 4 books for shs. 24000. How much will 9 similar books cost?
5.	Fill in the missing number in the factor tree. 	10.	Express 64948 in expanded form.

SECTION B (15marks)

11. The sum of the values in the table are the same vertically, horizontally and diagonally. Fill in to complete the table. (show the working). (5marks)

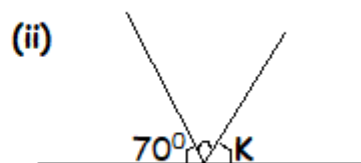
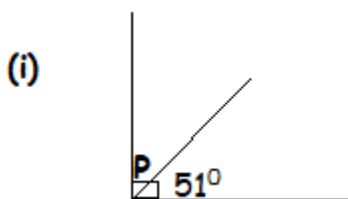
—	—	18	7
15	10	9	—
—	14	13	8
16	5	—	19

- 12a) Using a pencil, a ruler and a pair of compasses only, construct a rectangle **ABCD** where the length is 7cm and the width 4cm. (4marks)

- b) What is the perimeter of the above rectangle? (1mark)

- 13a) Calculate the complementary angle of 73° . (1mark)

- b) Work out the value of the unknowns in the following. (2marks @)



END

SIR APOLLO KAGGWA SCHOOLS

PRIMARY FIVE SCIENCE SET SIX

1. Name the type of leaf venation common in leguminous plants.


2. What determines the sinking or floating of objects in water?

3. State one way of controlling soil erosion in a school compound.

4. How are queen bees useful in the hive?

5. State the difference between the cause of polio and that of rickets.

The diagram below shows the head of a tapeworm. Study and use it to answer questions 6 and 7.



6. Name the structures marked A. _____

7. In which way is part marked B useful to the tapeworm?

8. State any one non- nutritional role of the beak to birds.

9. Apart from digging, give one other use of a hoe to crop farmers.

10. State any one danger of sharing a living house with domestic animals.

11. Name the process by which food moves along the alimentary canal.

12. State the use of incisor teeth to a person.

13. The diagram below shows a person ready to harvest honey. Study and use it to answer questions about it.



14.(a) Name the tools marked N and L.

N _____

L _____

(b) How is the tool marked M useful to a bee harvester?

(c) Name any one method of extracting honey from honey Combs.

15.(a) Mention one way soil is formed.

(b) Name the type of soil with:

(i) rough particles _____

(ii) smooth particles _____

(c) In which way is soil useful to plants?

END

SIR APOLLO KAGGWA SCHOOLS

PRIMARY FIVE SST SET SIX

17. Name the type of weather which makes sweat.

18. How are nimbus clouds important to farmers?

19. How do humps put on roads help to reduce road accidents?

20. Name one social service centre in a community.

21. Why should a school have rules and regulations?

22. Give one component of a homestead.

23. Who represents a President at the district level?

24. Name any one symbol of your school.

25. Why should Uganda be at peace with her neighbours?

26. Give one reason why Kabale district does not have good road network.

27. Either: Why did Jesus perform miracles?

OR: Why did Prophet Muhammad perform miracles?

28. Either: Which day marks the end of lent period?

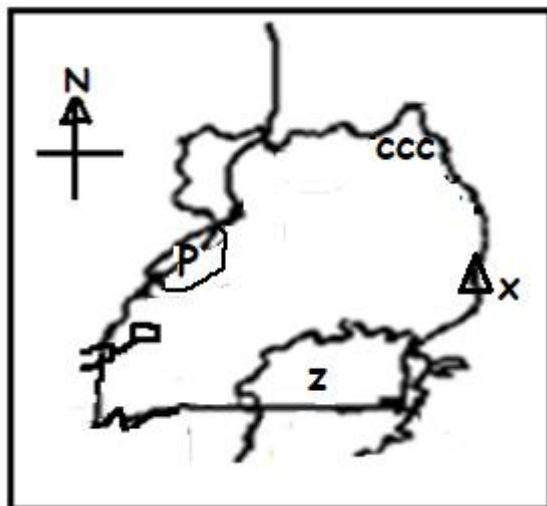
OR: Which celebration marks the end of Ramathan?

29. Either: Name the apostle who replaced Judas Iscariot.

OR: Who was the first successor of Prophet Muhammad?

SECTION B

30. Study the sketch map of Uganda below and answer questions that follow;



a) State the main activity done in the area marked **CCC**.

b) Which important mineral was discovered along the shores of lake marked **P**? _____

c) Name one inland port found on Lake **Z** in Uganda.

d) State one factor which favours the growing of Arabic coffee on the slopes of mountain marked **X**.

31. Complete the table below correctly.

Cash crop	product
_____	Cigarettes/ Cigar
(ii) Cotton	_____
_____	Sugar
tea	_____

32. FOR BOTH

a) What is a prayer?

b) Mention any two groups of people who need our daily prayers.

c) Who do Christians and Moslems pray?

END

