

SIR APOLLO KAGGWA SCHOOLS

PRIMARY FIVE SCIENCE SET FOUR

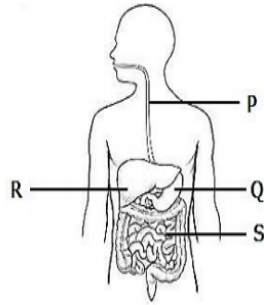
1. Name the garden tool used for felling big trees during land preparation for growing crops.
2. How is the tongue useful during the process of food digestion?
3. State the importance of maintaining proper personal hygiene.
4. Give any one characteristic which makes loam soil suitable for crop growth.

The diagram below shows a feather of a bird. Study it and answer questions 5 and 6.



5. Identify the type of feather shown.
6. Give any one way the above feather is useful to a bird.
7. State any one sign of kwashiorkor in babies.
8. Write any one danger of tartar found on teeth.
9. In which way does pouring oil on stagnant water control the breeding of mosquitoes?
10. How is the cause of burns different from that of scalds?
11. State the importance of immunity to the body of a person.
12. What reproductive advantage do local breeds of chicken have over the exotic breeds?
13. (a) Apart from transpiration, name any other process which occurs in plant leaves.
(b) List any two external factors which affect the rate of transpiration.
(c) How useful is transpiration to plants?

The diagram below shows the human digestive system. Study it and answer questions about it.




14. (a) Name the part marked Q.
 (b) By which process does food move along part P?
 (c) Give any one thing that happens to food when it reaches part R.
 (d) State any one way part S is adapted to its functions.

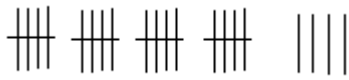
PRIMARY FIVE MATHS SET FOUR

SECTION A (10 marks)

1. Divide: 6363 by 7
2. Work out $\frac{2}{3} - \frac{1}{2}$
3. Round off 796 to the nearest tens.
4. Given that $a = 3$ and $b = 2$, find the value $ab - b$
5. Calculate the area of the figure.



6. Find the sum of the next two numbers in the sequence.
 1, 2, 6, 15, _____, _____
7. A teacher counted pupils without school uniform in class and tallied them as follows.

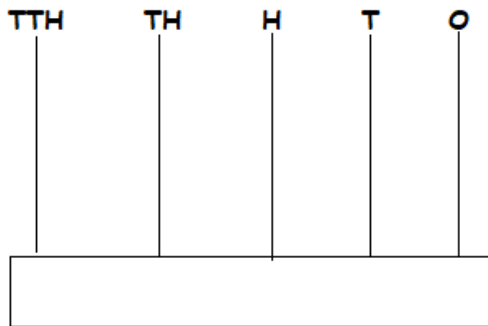


How many pupils didn't have the school uniform?

8. A trader sold a pair of shoes at shs. 32800 making a profit of shs. 1200. What was the buying price of the pair of shoes?
9. Given that set $K = \{g, m, v\}$. List the subsets that can be formed from the above set.
10. Express 36 in Roman Numerals.

Section B (15 marks)

11. (a) Draw beads to show the number 3405 on the abacus below (2marks)



- (b) Write the number above in words (1mark)
- (c) What is the place value of 4 in the number 240? (1mark)
- (d) Expand 240 using values. (1mark)

12. The data below shows numbers of students who play different games.

| | |
|------------|----|
| Football | 55 |
| Volleyball | 45 |
| Netball | 40 |
| Basketball | 40 |

Tennis20

- (a) Find the total number of students in the school. (2marks)
- (b) How many more pupils play football than Tennis? (2marks)
- (c) Name the students' favourite game. (1mark)

13.(a) Solve for the following unknowns;

(i) $P + 4 = 7$ (1mark)

(ii) $\frac{m}{3} = 5$ (1mark)

(iii) $K - 8 = 37$ (1 mark)

- (b) Think of a number, multiply it by 8 and the answer is 40. What is the number. (2marks)

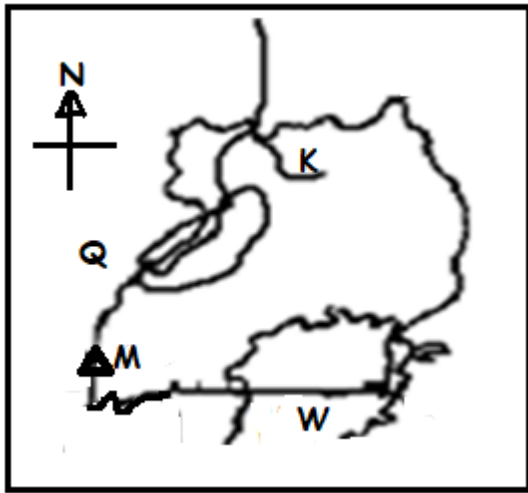
PRIMARY FIVE SST SET FOUR

SECTION A

1. What is grid reference?
2. State the political importance of physical features.
3. Why do farmers in hilly areas of Uganda practice terrace farming?
4. Mention any one problem faced by people living near lakes when it rains heavily.
5. Why should Uganda be at peace with her neighbours?
6. Give one problem faced by parents as they look for family basic needs.
7. Why are there few people in Uganda who travel by air?
8. What is natural vegetation?
9. Compare the formation of Mt Elgon to that of Mt Rwenzori
10. How many non-landlocked countries share borders with Uganda?
11. Either: Who was the most beloved apostle of Jesus Christ?
OR: Who did Prophet Muhammed refer to as "Al-Swidiq"?
12. Either: Why did God send Adam and Eva out of the Garden of Eden?
OR: Why did Allah send Adam and Hawa out of Janah?

SECTION B

Study the map of Uganda below and answer questions correctly.



- 13a) Name the river marked with letter K.
- b) Why is feature M snowcapped throughout the year?
- c) What is the capital city of country marked Q.
- d) Name one inland port found on lake marked W.

- 14a) What is the major cash crop grown on the slopes of Mt Elgon?
- b) State any one factor that favours the growing of the above cash crop on the slopes of Mt. Elgon.
- c) Name any two tribes in Uganda which live on the slopes of Mt. Elgon.

For question 15 answer either the Christianity or Islamic question but not both.

15. Either(a) Who led the Israelites out of Egypt?
- b) State two reasons why God chose the person named in (a) above to lead the Israelites.
- c) Mention any one problem faced by the Israelites on their way to Canaan.
- OR(a) Who led the Banu Israel out of Msiti?
- b) State two reasons why Allah chose the person named in (a) above to lead the Banu-Israel.
- c) Mention any one problem faced by the Banu-Israel on their way out of Msiti?

PRIMARY FIVE ENGLISH SET FOUR

Complete each sentence with a correct word.

1. Matia wrote _____ interesting article.
2. Travelling _____air is better than travelling by road.
3. If I bought a computer, I _____play video games.
4. The news _____ did not edit the news today.

Complete the sentence using the correct form of the word given in the brackets.

5. Aaron _____ the number and waited. (dial)
6. The news was _____ on Radio One. (broadcast)
7. She rarely _____ to her brother's messages these days. (reply)
8. The conductress _____ received the fare. (happy)

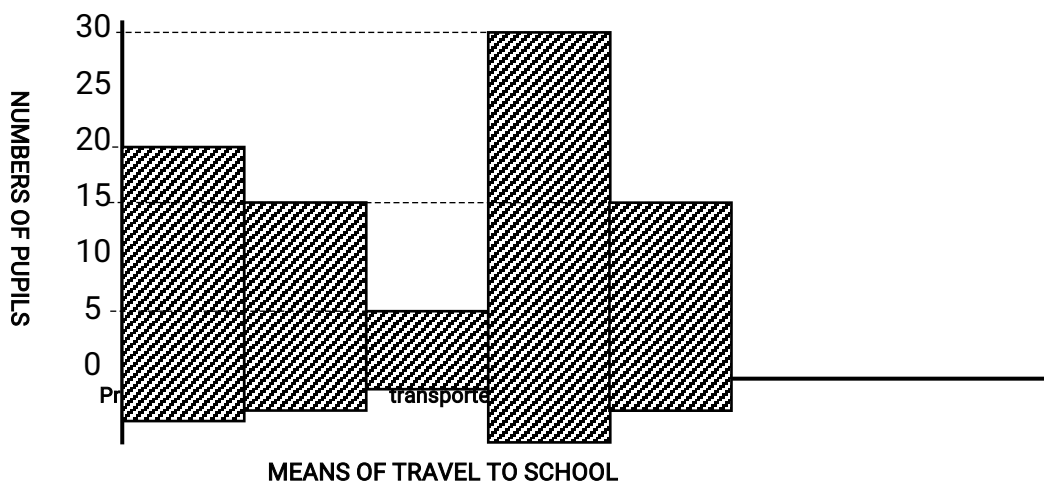
Re-arrange the given set of words in alphabetical order.

9. postal, posts, post, postage
10. bus, bike, bicycle, boda

Re-write the sentences as instructed in the brackets.

11. I like travelling by road. I don't like travelling by water that much.
(Join using.....prefer.....)
12. Those are the spare parts. Kwizera bought them yesterday.
(Join using.....which.....)
13. I gave him money to buy a stamp but he didn't buy it. (Begin: Despite.....)
14. We should wear face masks when we are in public. We want to avoid COVID-19.
(Join using.....in order to.....)
15. We arrived at Mbuya at midday. (Use.....reached.....)

The graph below shows the means of travel used by Primary Five pupils at Sir Apollo Kaggwa Primary School.



Questions

- (a) What does the graph above show?
- (b) How many pupils are in the class?
- (c) How many pupils travel to school by bicycle?

(d) How many more pupils travel by private car than bicycle?

(e) How many means of travel are shown on the graph?

Complete the paragraph by using the words in the table below to fill in the spaces.

| | | | | |
|-----|---------------|---------|--------|------------|
| flu | washing hands | disease | doctor | 0800100066 |
|-----|---------------|---------|--------|------------|

Covid-19 is a dangerous_____. When you catch Covid-19, don't go to hospital, stay at home and call your_____ or the ministry of health on toll free number _____. The signs and symptoms of Covid-19 include serious fever, dry cough, _____ and shortness of breath. We can avoid this disease by _____, keeping a social distance and quarantine.

END

