

SIR APOLLO KAGGWA SCHOOLS

PRIMARY FIVE ENGLISH SET FIVE

Fill in the blank space with the most suitable word.

1. Most Ugandans prefer music _____athletics.
2. The careless driver was arrested _____the traffic.
3. _____of the three websites are you going to use?
4. _____from chicken, I also enjoy eating pizza.

Use the correct form of the word in brackets to complete the sentence.

5. My uncle married a _____woman. (Rwanda)
6. I can write a _____letter. (person)
7. Hellen Lukoma is a _____Ugandan actress. (success)
8. How many_____does a friendly letter have? (address)

Re-write the sentences giving the plural form of the underlined word.

9. He bought the cloth to cover the computer.
10. Did you see the Somali?

Re-write as instructed in the brackets.

11. My father is a short man. He is handsome. He is black. (Join as one sentence beginning; My father is aman.)
12. Njoroge is a Kenyan. Ngotho is a Kenyan. (Begin: Both.....)
13. Oscar saved money. He wanted to buy a computer.
(Join the sentences using.....so that.....)
14. The black phone is mine. (Rewrite using.....belongs.....)
15. Jasmin is a german but not a Spaniard said peter.
(Punctuate the sentence correctly)

16. Read the passage and answer the questions about it.

A mobile phone is a portable electronic device that is used to send messages and make telephone calls. It was invented on 3rd April, 1973 by Martin Cooper. The first

mobile phone was big and simple. The modern mobile phone has been developed to have a camera, camcorder, music player, games and the internet. This internet has enabled the use of social media platforms such as Twitter, Facebook, WhatsApp, Instagram, YouTube and so on. The latest innovation of a mobile phone is the smartphone. This phone has apps and works just like a computer. It also has a touch screen which makes it easy to use.

A mobile phone uses a SimCard provided by service provider such as MTN, Airtel and Africel. In order to make telephone calls, one need to load airtime on the phone. The mobile phone is also used with mobile money services. This has helped people to transfer money easily. People can also do online shopping using the mobile phone.

Generally, a mobile phone is multifunctional and it's the greatest necessity in the modern world.

Questions;

1. Who invented the mobile phone?
2. When was the mobile phone invented?
3. According to the passage, what has enabled the use of social media platforms?
4. Which is the latest innovation of the mobile phone?
5. What does a person need to do in order to make telephone calls?
6. How helpful are mobile money services?
7. Write the opposite of the following words as used in the passage;
(i) simple _____
(ii) modern _____
8. Write the full form of the underlined short form apps.
9. Suggest a suitable title for the passage.

PRIMARY FIVE MATHS SET FIVE

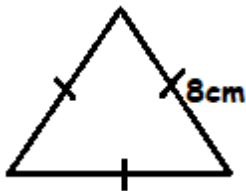
SECTION A

1. Add: 2 0 5

$$\begin{array}{r} + 4 3 4 \\ \hline \hline \end{array}$$

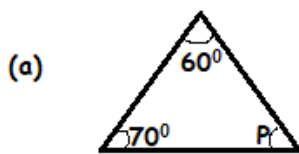
2. Express XXIV in Hindu Arabic Numerals.

3. If $P = 6$. What is the value of P ?
4. If set $Q = \{2, 4, 6, 8, 9\}$ and $P = \{1, 2, 3, 5, 6, 8\}$. Find $P \cap Q$.
5. Find the next number in the sequence
9, 11, 13, 15, ____
6. Change 13kg to grammes.
7. Express $4\frac{1}{2}$ as an improper fraction.
8. Divide 126 by 3.
9. What is the value of 7 in the number below.
5724?
10. Find the perimeter of the triangle below.



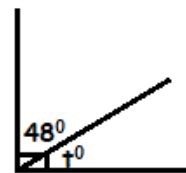
SECTION B

11. What is the value of the unknown angles in the figure below.




(2marks)

(c)



(2marks)



(2marks)

12. Kityo bought the following items from a shop.

- 1kg of sugar at shs. 4000.
- 2 apples of shs. 1000 each
- 1 bottle of milk at aha. 2000

A packet of pencils at shs. 3000

- a) How much did he spend on sugar and milk? (2marks)
- b) How much did he spend on apples and pencils? (2marks)
- c) Find his total expenditure. (2marks)
13. (a) Solve for b: $b + 8 = 15$. (2marks)
- (b) Simplify: $3p + 2y + p + y$ (1mark)

PRIMARY FIVE SCIENCE SET FIVE

1. In which way is sun important in the formation of rain?
2. How do bees benefit from plants?
3. Why does a coin sink in the basin full of water?
4. Give one example of a plant with prop roots
5. How are suckers useful to a tape worm?
6. Why is calcium included in layers feed?
7. Apart from carbohydrates, name one other class of food that provides energy.
8. Which gas is used to preserve food?

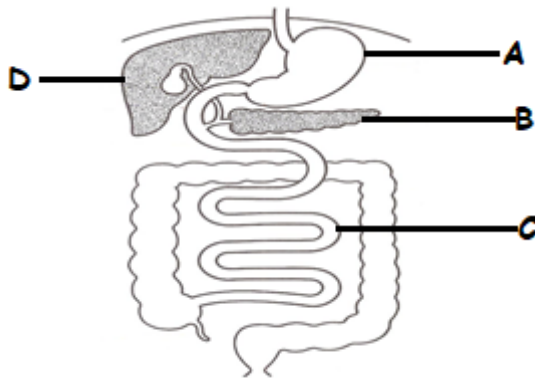
The diagram below is of a common animal, use it to answer question 9 and 10.



9. Which disease does the above animal spread to humans?
10. How is part K important to the above animal?
11. (a) Give any two agents of pollination in flowering plants.
- (b) State any two characteristics of insect pollinated flowers.

12. (a) Give any two signs which show that a baby is dehydrated.
- (b) Identify two solutes used in the preparation of ORS locally.
13. (a) State any two types of poultry.
- (b) Give any two viral poultry diseases.
14. (a) Identify any two vaccines which have more than one doses.
- (b) Apart from artificial immunity, give one other type of immunity
- (c) Which immunisable disease affects the liver.

15. The diagram below shows part of a digestive system. Use it to answer questions.



- a) Name the parts marked **A** and **D**
- b) How is part **D** important to the digestive system?
- c) Give one disorder of the digestive system.

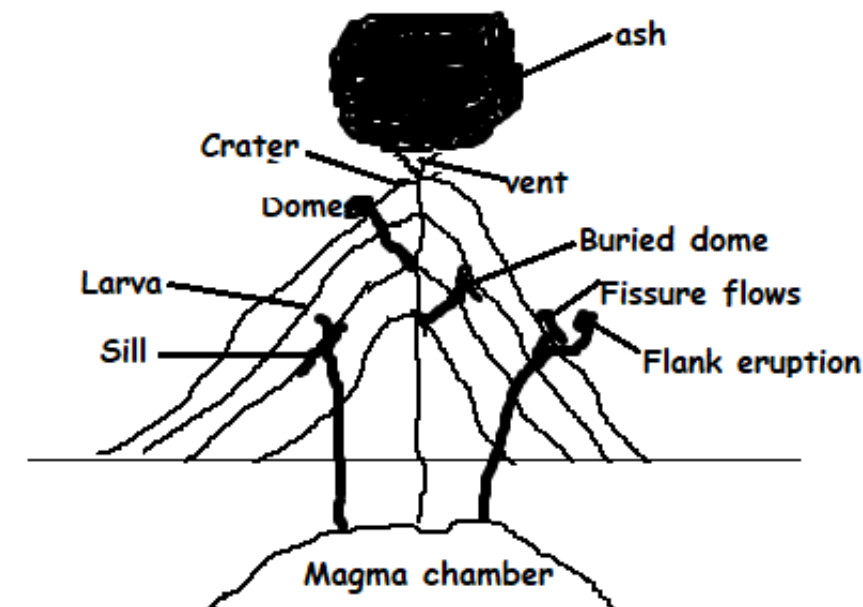
PRIMARY FIVE SST SET FIVE

SECTION A

1. What is meant by natural vegetation?
2. Why are no dams on Albert Nile?
3. Name the deepest lake in Uganda.
4. Why is the equator marked 0°?
5. How does deforestation affect climate?
6. Give one example of a land mark.
7. Draw a map symbol of a quarry.
8. What are social activities?
9. Either: Who was the husband of Elizabeth?
OR: Who was the foster mother of Muhammed?
10. Either: Why do Christians visit Namugongo on 3rd June?
OR: What is Salat?

SECTION B

11. (a) Name any 3 Islands that make up Kalangala district.
(b) Give any two problems faced by people in Kalangala.
12. Study the diagram and answer the questions



- a) Give two mountains formed by the above process.
- b) What is meant by the following
 - (i) Vent

- (ii) Magma
 - (iii) Lava
13. (a) Mention any two factors of climate.
- (b) Why do people in mountainous areas wear heavy and thick clothes?

END