

SIR APOLLO KAGGWA SCHOOLS

PRIMARY TWO REVISION ACTIVITIES WEEK FOUR

LITERACY ONE

Theme: Our home and community

1. Write down two people found at home

a) _____

b) _____

2. Fill in the missing letters

h__spi__al

peop__e

m__rk__t

n__rs__

3. Circle words with sound "th"

a) earth, eat, went, tent

b) month, thorn, head, daughter

4. Answer the riddles correctly

a) I keep law and order. Who am I?

b) I treat sick people. Who am I?

5. Match correctly

carpenter

market

pilot

workshop

Market vendor

airport

LITERACY TWO

THEME: Our home and community

1. Name any two types of relatives

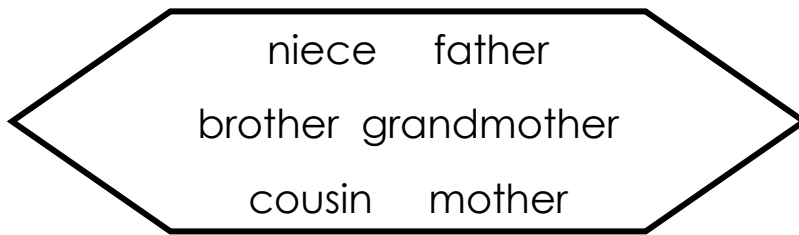
a) _____

b) _____

2. What is a community?

3. Name the smallest example of a community.

4. Write out people found in a nuclear family.





- a) _____
- b) _____
- c) _____

5. **Complete the table below**

<u>Tribe</u>	<u>language</u>
Baganda	_____
_____	Runyankole
Karamajong	_____

6. _____ is the way of living in a society.

7. **Name these important places in our community.**

8. Who are twins?

9. What name is given to the father of twins in Buganda?

RELIGIOUS EDUCATION

1. Name the apostle who;

a) Betrayed Jesus _____

b) Denied Jesus _____

2. What title is given to a person who calls muslims for prayers?

3. Church is to Christians as _____ is to muslims.

4. Who was the father of prophet Muhammad?

5. How many days do muslims fast?

6. Write one book in the Bible

7. Write down two things God does not want us to do

a) _____

b) _____

8. Why do people pray to God or Allah? Give two reasons

a) _____


b) _____

9. Name any two muslim names for boys.

a) _____

b) _____

10. **Name these people who need our help.**



ENGLISH

Theme: Our home and community

1. **Write these words in short form.**

a) doctor _____

b) Sunday _____

2. **Punctuate correctly**

a) my name is annet

b) why are you crying

c) i have two brothers

3. **Fill in has or have.**

a) She _____ a nice bag.

b) We _____ good parents.

c) It _____ a long tail.

4. Match the gender opposites

Male

female

father

daughter

brother

aunt

son

mother

uncle

sister

5. Give the pronouns for the underlined words.

a) Janat is a beautiful girl. _____

b) Musa and John are friends. _____

c) Peter is a good boy. _____

READING

1. Form words with the sounds below

ou _____ nt _____

ow _____ fl _____

2. Use these words to write correct sentences.

a) bed _____

b) bird _____

c) bad _____

3. Use the given words to fill the gaps correctly

good, wood, broom, books, wool

a) We get _____ from a sheep.





b) It is _____ to obey our parents.

c) The _____ are in the shelf.

d) We use a _____ to sweep.

e) Furniture are things made out of _____

4. Study the picture and answer the questions in full sentences

			
Pretty	mother	Peter	

a) What is Pretty doing?

b) What is mother doing

c) Where is the snake?

d) Who is reading a book?

NUMERACY

OPERATION ON WHOLE NUMBERS

Multiplying numbers using repeated addition.

Note

Multiplication is repeated addition.

Example

$$\begin{array}{c} 2 + 2 = 4 \\ \text{oo} \quad \text{oo} \end{array}$$

$$\left. \begin{array}{c} 2 \times 2 = 4 \\ \text{oo} \quad \text{oo} \end{array} \right\} \text{Two groups of two.}$$

$$2 \text{ twos} = 4$$



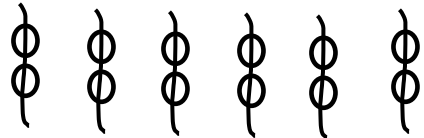
$$\begin{array}{l}
 3 + 3 + 3 = 9 \\
 \text{ooo} \quad \text{ooo} \quad \text{ooo} \\
 \\
 3 \times 3 = 9 \\
 \text{ooo} \quad \text{ooo} \quad \text{ooo} \\
 \text{---} \quad \text{---} \quad \text{---} \\
 \\
 3 \text{ threes} = 9
 \end{array}
 \left. \vphantom{\begin{array}{l} 3 + 3 + 3 = 9 \\ 3 \times 3 = 9 \\ 3 \text{ threes} = 9 \end{array}} \right\} \text{Three groups of three.}$$

ACTIVITY

1. Work out correctly.

a) $3 \times 3 = \underline{\hspace{2cm}}$

b) $2 + 2 + 2 + 2 = \square$
 $\underline{\hspace{1cm}} \times \underline{\hspace{1cm}} = \underline{\hspace{2cm}}$

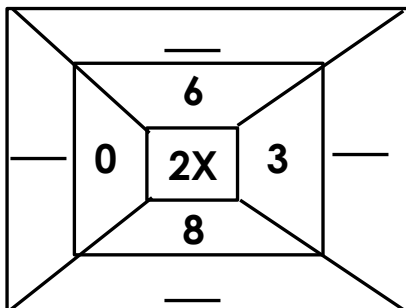
c) 
 $\underline{\hspace{1cm}} \times \underline{\hspace{1cm}} = \square$

2. a)
$$\begin{array}{r}
 2 \quad 3 \\
 \times \quad 2 \\
 \hline
 \end{array}$$

b)
$$\begin{array}{r}
 4 \quad 1 \\
 \times \quad 2 \\
 \hline
 \end{array}$$

c)
$$\begin{array}{r}
 2 \quad 2 \quad 0 \\
 \times \quad 2 \\
 \hline
 \end{array}$$

3. Complete the table correctly.



4. One stool has 3 legs. How many legs do 4 stools have?

5. A week has 7 days. How many days are in 2 weeks?

6. **Complete correctly.**

a) 4 threes =

b) 2 fours =

c)  = _____ twos.